

## Høvuðbrot 2

Set  $+$  ella  $-$  í sirklarnar, so svarini verða røtt.

$$4 \bigcirc 1 \bigcirc 2 = 3$$

$$3 \bigcirc 2 \bigcirc 5 = 6$$

$$1 \bigcirc 5 \bigcirc 6 = 12$$

$$8 \bigcirc 3 \bigcirc 2 = 7$$

$$10 \bigcirc 2 \bigcirc 2 = 6$$

$$9 \bigcirc 4 \bigcirc 6 = 11$$

$$7 \bigcirc 3 \bigcirc 1 = 9$$


$$12 \bigcirc 4 \bigcirc 5 = 13$$

$$24 \bigcirc 10 \bigcirc 2 = 16$$

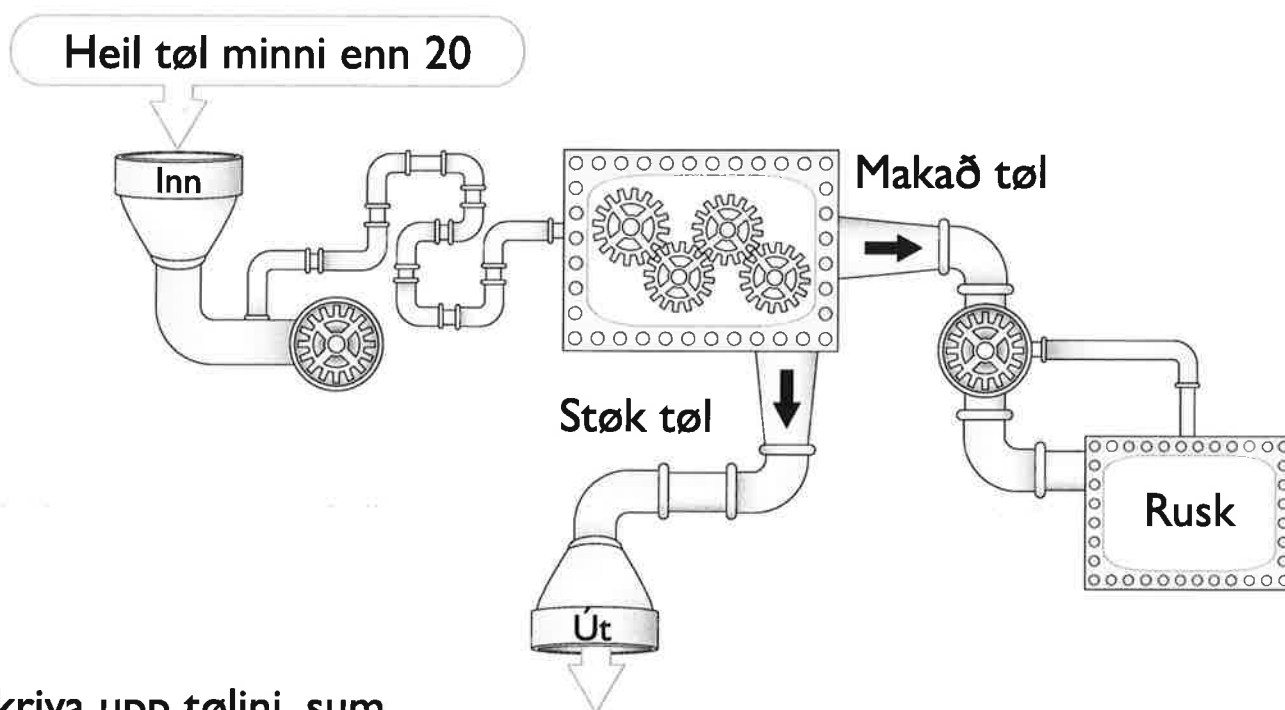
$$34 \bigcirc 10 \bigcirc 20 = 24$$

$$60 \bigcirc 15 \bigcirc 3 = 48$$

$$100 \bigcirc 25 \bigcirc 10 = 65$$



### Høvuðbrot 3

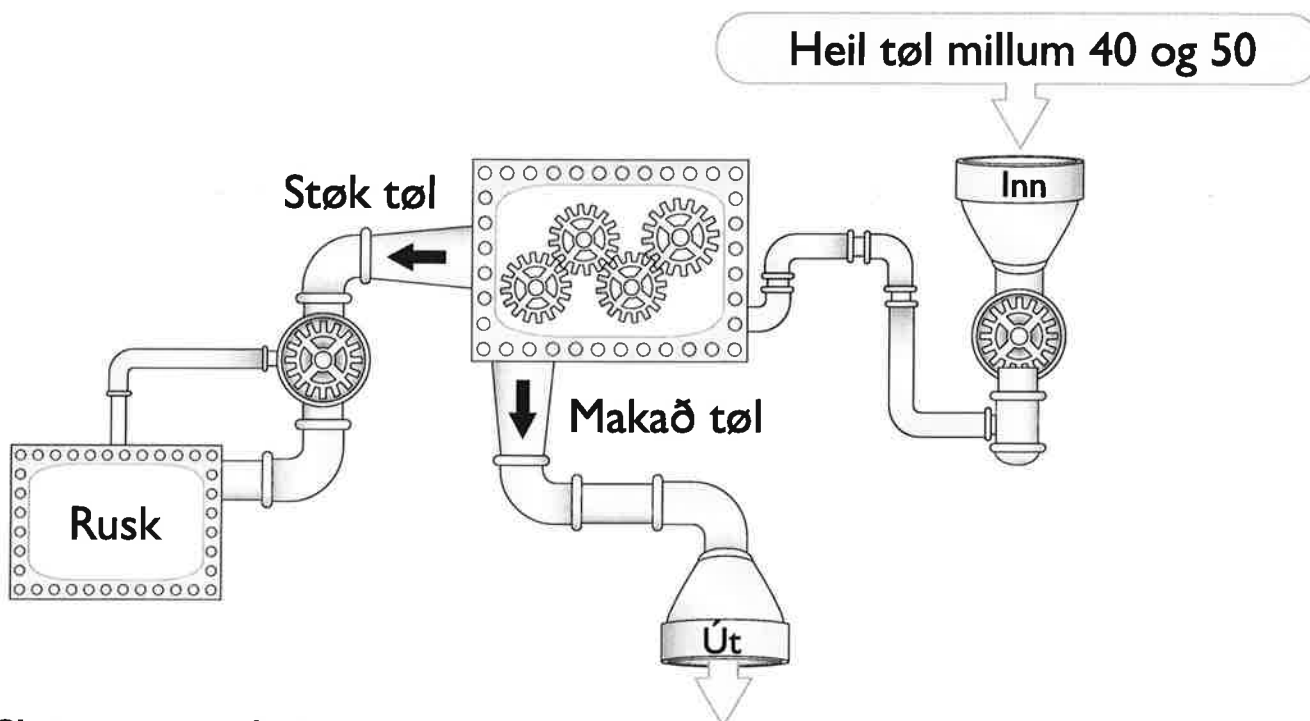


Skriva upp tølini, sum  
koma út:

---



---



Skriva upp tølini, sum  
koma út:

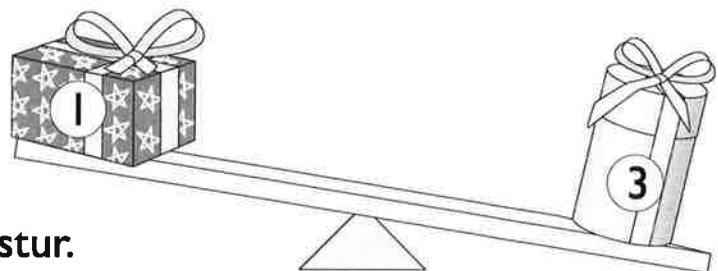
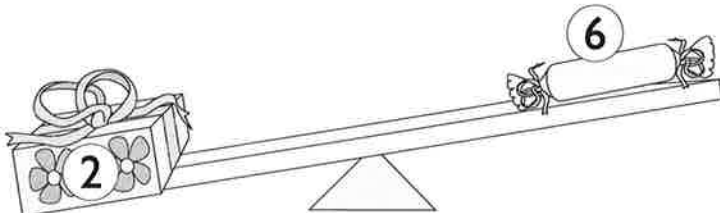
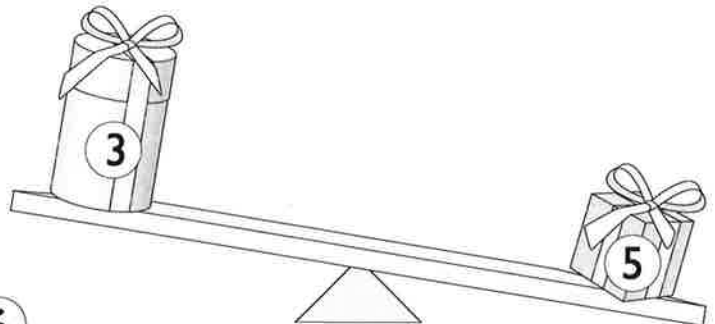
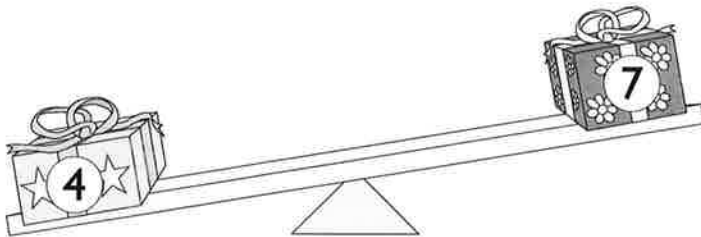
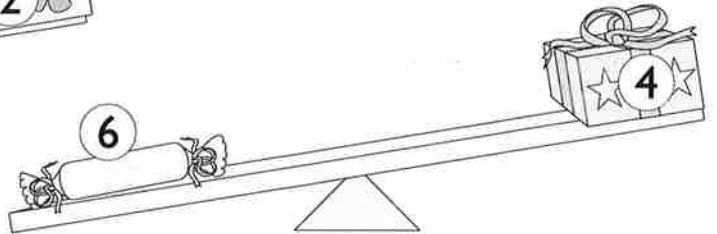
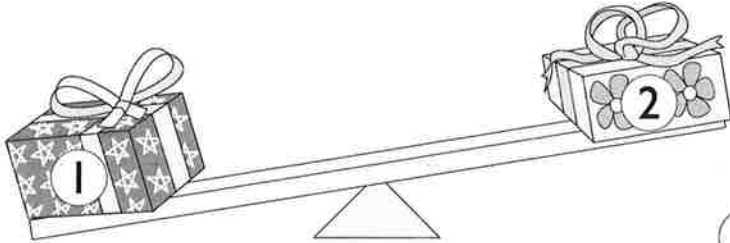
---



---

# Høvuðbrot 4

Hvør er tyngstur? Hvør er lættastur?

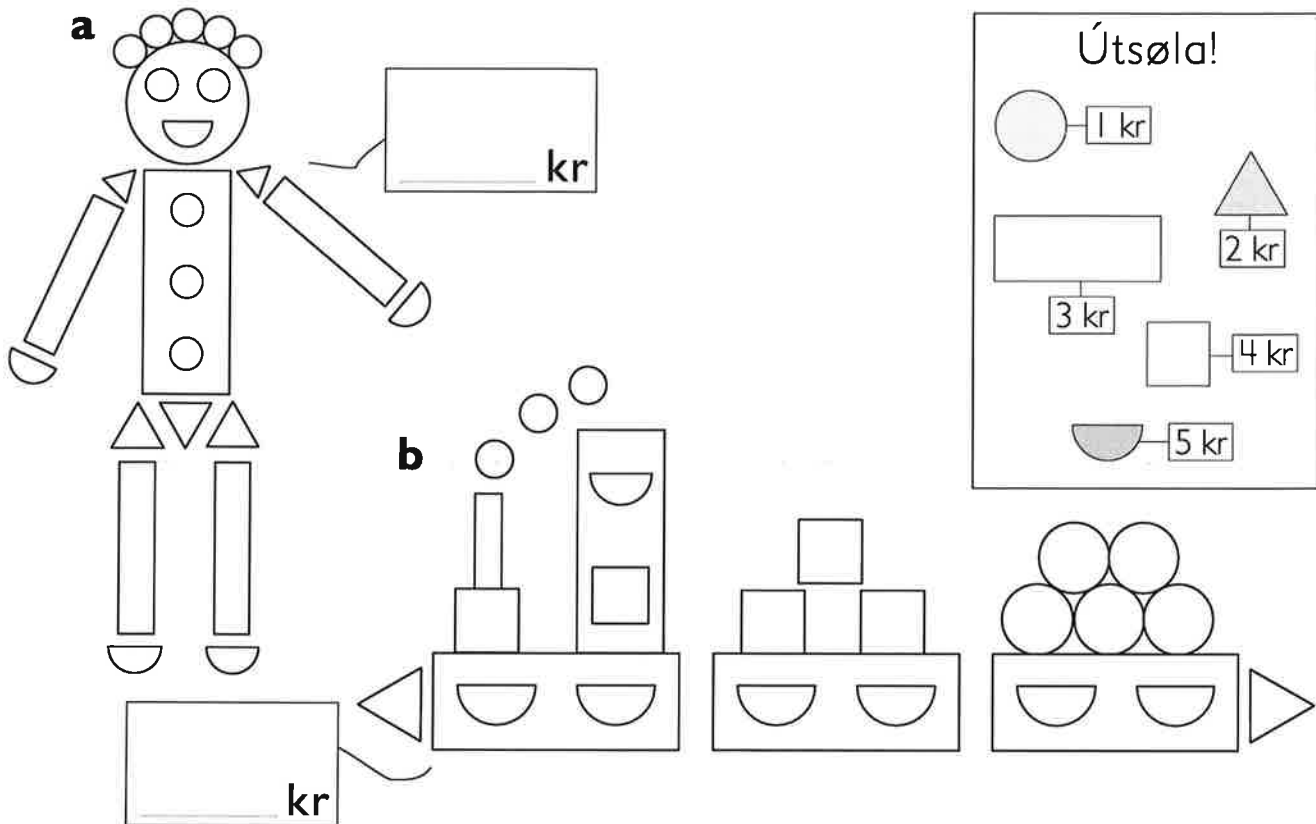


Pakki nummar \_\_\_\_\_ er tyngstur.

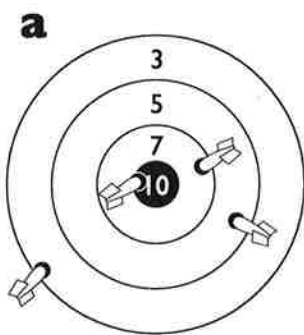
Pakki nummer \_\_\_\_\_ er lættastur.

## Høvuðbrot 5

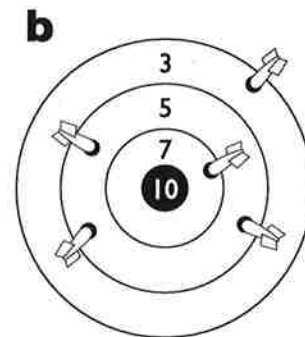
I Hvat kosta leikurnar? Hygg í príslistan.



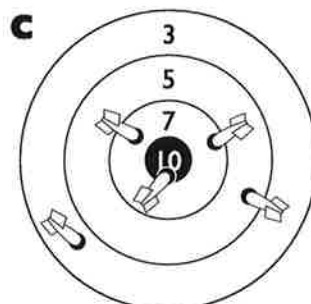
2 Hvussu nógv stig?



\_\_\_\_\_ stig



\_\_\_\_\_ stig



\_\_\_\_\_ stig




## Høvuðbrot 6

1 Turið hevur 40 kr.

Hon keypir eina sodavatn.


Hvussu nógvar bollar kann hon keypa?



2 Tóta hevur 50 kr.

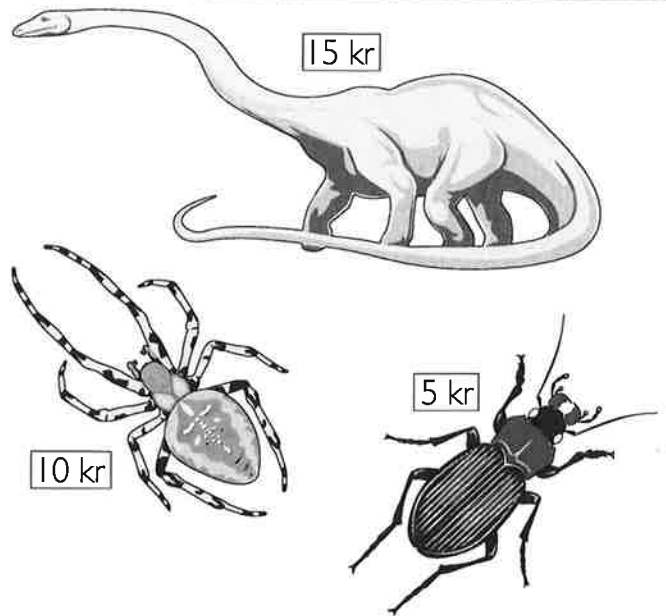

Hon keypir eitt blað.

Hvussu nógvar sleikisneisar kann hon keypa?



**Høvuðbrot 7**

- 1 Álvur hevur 100 kr.  
Hann skal keypa 10 spælidýr.  
Hvat kann hann keypa?

**2 Hvør er Jón?**

- Hann er ikki drongurin í miðjuni.
- Hann er ikki drongurin uttast høgrumegin.
- Hann er ikki størsti drongurin.
- Hann er heldur ikki tann minsti.

## Høvuðbrot 8

- 1 Hendrik er 16 ára gamal. Birta er helvtina so gomul.

Hvussu gomul er Birta um fimm ár?



- 2 Í einum træi sótu 12 fuglar.  
Helvtin fleyg burtur, men fyra komu aftur.

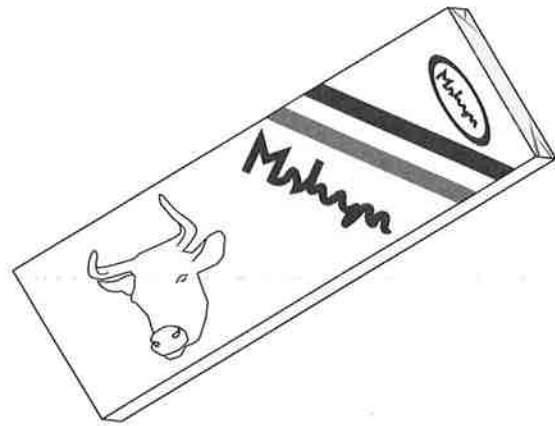
Hvussu nógvir fuglar sótu tá í trænum?



**Høvuðbrot 9**

- 1 Í kioskini kostar ein sjokulátpláta 28 kr.  
Tað er 5 kr bíligari enn í handlinum.

Hvat kostar sjokulátan í handlinum?



- 2 Í matvøruhandlinum kostar ein eskja av ísi 33 kr.  
Tað er 4 kr meiri enn í kioskini.

Hvat kostar ísurin í kioskini?






## Høvuðbrot 10

- 1 Hálsur og høvd á Dino eru til samans dupult so long sum kroppurin.

Kroppurin er helvtina so langur sum halin.

Halin er 14 metrar langur.

Hvussu langur er Dino?



- 2 Kári fann sjeý stórar, tómar fløskur.

Linda fann tríggjar stórar, tómar fløskur og tvær smáar.

Eli fann tvær stórar og fýra smáar fløskur.

Tey seldu fløskurnar og býttu pengarnar javnt sínámillum.

Hvussu nógv fingur tey í part?

