



90	91	92	93	94	95	96	97	98	99
80	81	82	83	84	85	86	87	88	89
70	71	72	73	74	75	76	77	78	79
60	61	62	63	64	65	66	67	68	69
50	51	52	53	54	55	56	57	58	59
40	41	42	43	44	45	46	47	48	49
30	31	32	33	34	35	36	37	38	39
20	21	22	23	24	25	26	27	28	29
10	11	12	13	14	15	16	17	18	19
0	1	2	3	4	5	6	7	8	9

90	91	92	93	94	95	96	97	98	99
80	81	82	83	84	85	86	87	88	89
70	71	72	73	74	75	76	77	78	79
60	61	62	63	64	65	66	67	68	69
50	51	52	53	54	55	56	57	58	59
40	41	42	43	44	45	46	47	48	49
30	31	32	33	34	35	36	37	38	39
20	21	22	23	24	25	26	27	28	29
10	11	12	13	14	15	16	17	18	19
0	1	2	3	4	5	6	7	8	9

= ?

-  =

80 - 14 =

46 - 13 =

82 - 11 =

56 - 18 =

66 - 13 =

100 - 28 =

80 - 12 =

72 - 24 =

51 - 14 =

85 - 22 =

86 - 13 =

89 - 11 =

71 - 15 =

69 - 23 =

93 - 16 =

70 - 12 =

79 - 36 =

53 - 17 =

98 - 22 =

40 - 7 =

96 - 33 =

49 - 11 =

77 - 26 =

68 - 16 =

84 - 11 =

91 - 14 =

100 - 22 =

81 - 20 =

75 - 32 =

89 - 21 =

94 - 23 =








78 - 25 =

59 - 11 =

72 - 14 =

97 - 21 =

## Fiskehandler

	38 kr.
	32 kr.
	47 kr.
	56 kr.
	72 kr.
	37 kr.
	76 kr.

## Find forskel i fiske-priser



$$38 - 25 =$$

$$- =$$

$$- =$$








$$- =$$

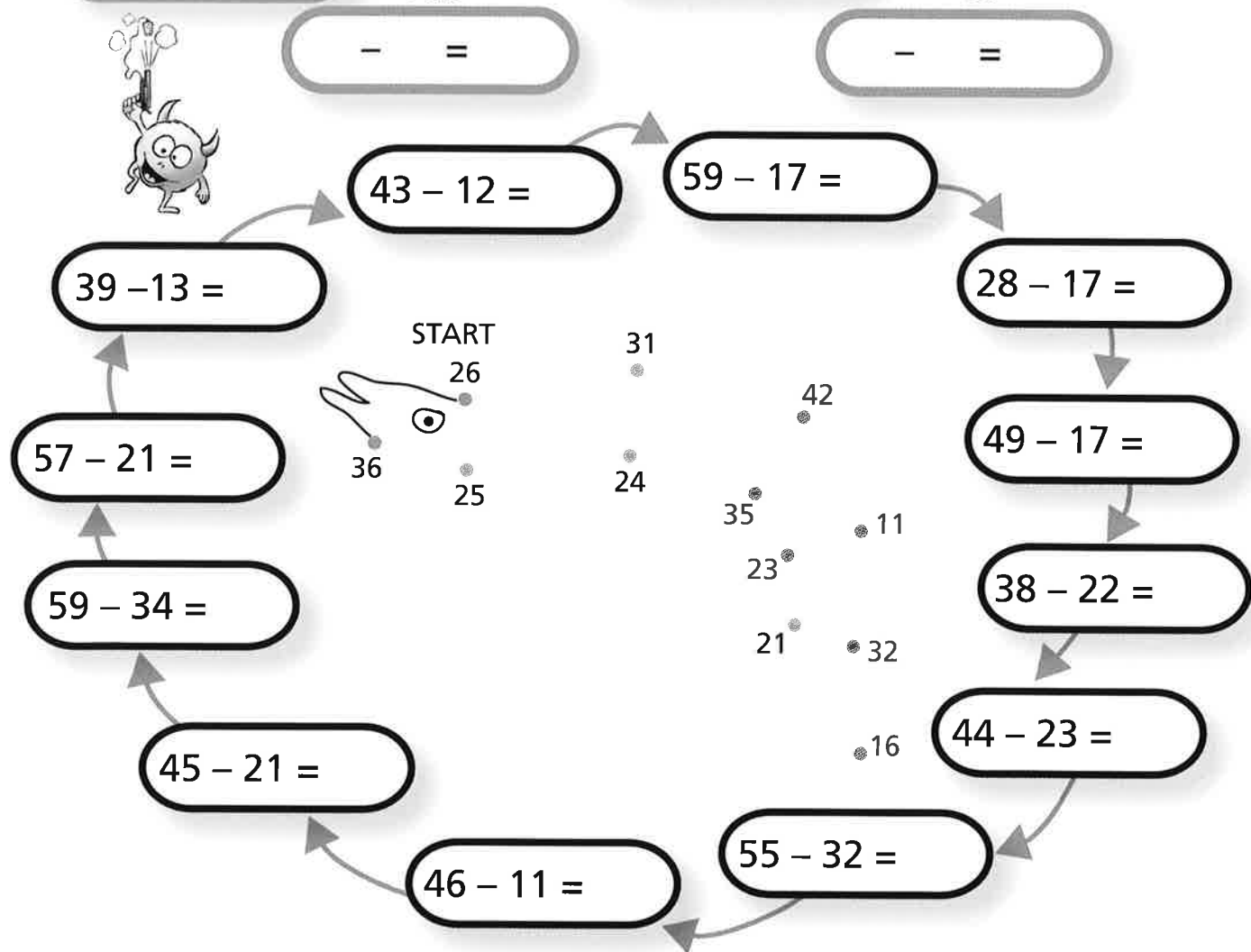
$$- =$$

$$- =$$








$$- =$$

## Supermarked

	25 kr.
	26 kr.
	38 kr.
	49 kr.
	58 kr.
	36 kr.
	59 kr.



# FISKEBODEN

	31 kr.
	41 kr.
	52 kr.
	38 kr.
	77 kr.
	35 kr.
	71 kr.

Find forskel  
i fiske-priser



$$36 - 31 =$$



$$- =$$



$$- =$$



$$- =$$



$$- =$$



$$- =$$



$$- =$$



$$32 - 14 =$$

$$43 - 15 =$$

$$36 - 19 =$$

$$44 - 17 =$$

$$87 - 25 =$$

$$63 - 15 =$$

$$72 - 13 =$$

$$55 - 16 =$$

$$65 - 16 =$$

$$58 - 29 =$$

$$63 - 28 =$$

$$45 - 8 =$$

START  
17

18

28

27

48

39

29

37

35

49

59

62

